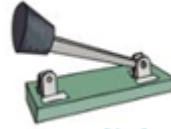
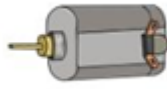


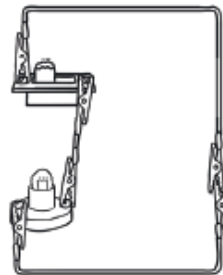
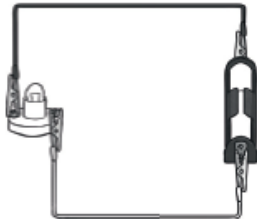
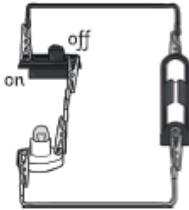
Year 4 Science Quiz Electricity

1 Name each of these components.



.....

2 Circle the circuits that will not light up.



3 Sort these materials into conductors and insulators of electricity.

wood plastic copper tin foil fabric paper

Conductors	Insulators

TD

The switch controls the circuit.

Do you agree or disagree with this statement? Explain your thinking.

.....

.....

.....